

International Indian School, Riyadh



Mid Term

2015-16

Class-I Subject: Mathematics

(I) FILLIN THE BLANKS

$4 \times 1 =$		$4 \times 10 =$	
$5 \times 5 =$		$5 \times 1 =$	
$4 \times 9 =$		$4 \times 2 =$	
$5 \times 3 =$		$5 \times 9 =$	
$4 \times 4 =$		$4 \times 3 =$	
$5 \times 8 =$		$5 \times 7 =$	
$4 \times 7 =$		$4 \times 3 =$	
$5 \times 4 =$		$5 \times 0 =$	
$4 \times 6 =$		$4 \times 8 =$	
$5 \times 2 =$		$5 \times 6 =$	

(II) WRITE THE NUMBER NAMES:

221	
302	
288	
375	
238	
364	
279	
350	
400	
343	
216	
399	
262	
337	
290	

(III) WRITE NUMERALS:

1.	4 tens + 5 ones = _____
2.	9 tens + 8 ones = _____
3.	10 tens + 0 one = _____
4.	3 tens + 3 ones = _____
5.	2 tens + 6 ones = _____
6.	5 tens + 1 one = _____
7.	1 ten + 9 ones = _____
8.	3 tens + 0 one = _____
9.	5 tens + 8 ones = _____
10.	7 tens + 9 ones = _____

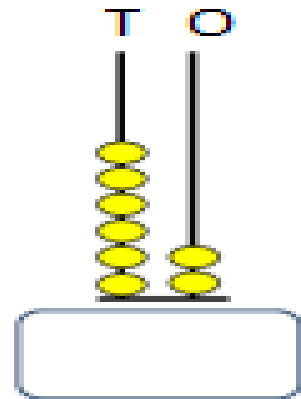
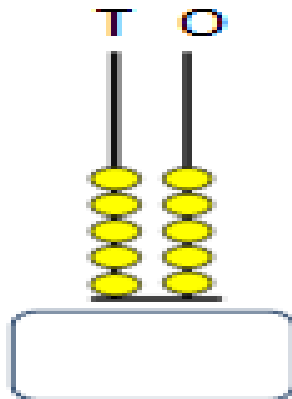
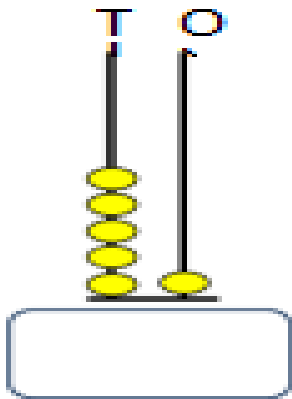
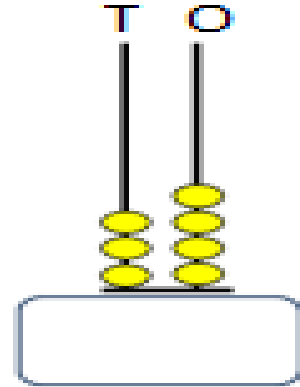
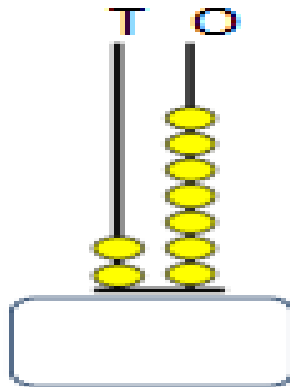
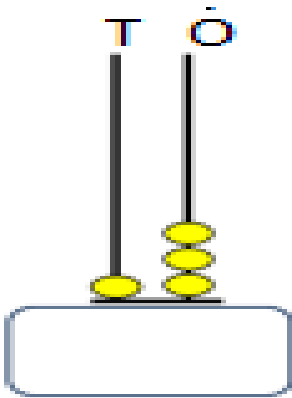
(IV) FILL IN THE BLANKS:

1.	1 ten = _____
2.	2 tens = _____
3.	3 tens = _____
4.	4 tens = _____
5.	5 tens = _____
6.	6 tens = _____
7.	7 tens = _____
8.	8 tens = _____
9.	9 tens = _____
10.	10 tens = _____

(V) WRITE TENS AND ONES:

39=	_____ tens + _____ ones
90=	_____ tens + _____ ones
41=	_____ tens + _____ ones
68=	_____ tens + _____ ones
11=	_____ ten + _____ ones
82=	_____ tens + _____ ones
65=	_____ tens + _____ ones
97=	_____ tens + _____ ones
86=	_____ tens + _____ ones
100=	_____ tens + _____ ones

(VI) COUNT ON THE ABACUS AND WRITE NUMERALS:



(VII) ADD THE FOLLOWING:

$$\begin{array}{r} 33 \\ +22 \\ \hline \end{array}$$

$$\begin{array}{r} 17 \\ +11 \\ \hline \end{array}$$

$$\begin{array}{r} 24 \\ +14 \\ \hline \end{array}$$

$$\begin{array}{r} 83 \\ +10 \\ \hline \end{array}$$

$$\begin{array}{r} 60 \\ +12 \\ \hline \end{array}$$

$$\begin{array}{r} 91 \\ +05 \\ \hline \end{array}$$

$$\begin{array}{r} 56 \\ +02 \\ \hline \end{array}$$

$$\begin{array}{r} 75 \\ +13 \\ \hline \end{array}$$

$$\begin{array}{r} 41 \\ +10 \\ \hline \end{array}$$

$$\begin{array}{r} 58 \\ +41 \\ \hline \end{array}$$

(VIII) FILL IN THE BOXES

(a) $60 + 20 = \square$

(b) $10 + 70 = \square$

(c) $70 + 20 = \square$

(D) $80 + 10 = \square$

(e) $20 + 40 = \square$

(f) $10 + 10 = \square$

(g) $40 + 30 = \square$

(h) $40 + 40 = \square$

(i) $30 + 20 = \square$

(j) $50 + 10 = \square$

(IX) WRITE IN INCREASING ORDER:

(a) 6 35 69 87

Ans- _____ , _____ , _____ , _____

(b) 18 63 95 44

Ans- _____ , _____ , _____ , _____

(c) 56 10 19 5

Ans- _____ , _____ , _____ , _____

(d) 63 91 93 81

Ans- _____ , _____ , _____ , _____

(e) 40 70 90 20

Ans- _____ , _____ , _____ , _____

(f) 81 71 17 18

Ans- _____ , _____ , _____ , _____

(g) 28 94 82 49

Ans- _____ , _____ , _____ , _____

(h) 90 96 9 19

Ans- _____ , _____ , _____ , _____

(X) STORY SUMS:

<p>(a) 76 people waiting in a line . 12 more people join them. How many people in all?</p> <p>Ans-_____ people.</p>	<p><u>Working</u></p>
<p>(b) Harish has 36 balloons.His Father gave him 3 more. How many bolloons are there in all?</p> <p>Ans-_____ balloons.</p>	<p><u>Working</u></p>
<p>(c) There are 14 blue caps and 5 red caps. How many caps are there in all?</p> <p>Ans-_____ caps.</p>	<p><u>Working</u></p>
<p>(d) Class 1-H 41 Boys 7 girls How many students are there in all?</p> <p>Ans-_____ students.</p>	<p><u>Working</u></p>

Good Luck